

Values of Objects Grid

Complete the following grids and solve for flowers, pears, trees, and bikes.

1) In the first grid we notice that:

Top row: flower, flower, tree = 30

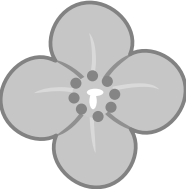
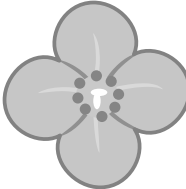







First column: Flower, bike, flower = 32

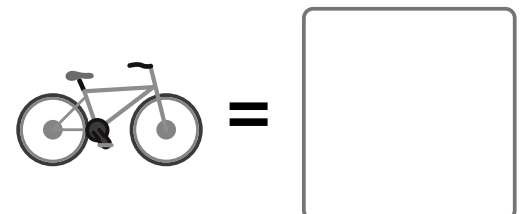
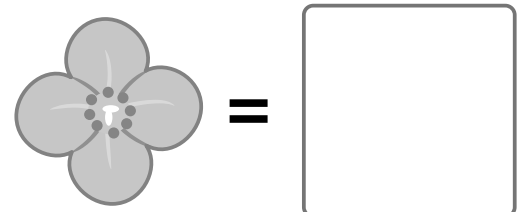
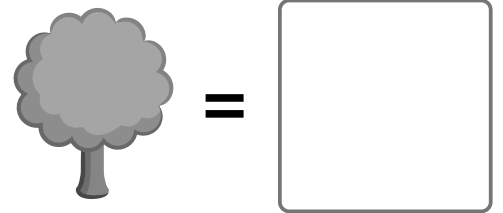
Middle row: bike, bike, bike = 24

Middle column: Flower, bike, tree = 26

Bottom row: flower, tree, tree = 24

Last column: tree, bike, tree = 20

| | | | |
|---|---|---|----|
|  |  |  | 30 |
|  |  |  | 24 |
|  |  |  | 24 |
| 32 | 26 | 20 | |



Values of Objects Grid

2) In the second grid we notice that:

Top row: tree, pear, pear = 22










First column: tree, tree, tree = 36

Middle row: tree, flower, flower = 32

Middle column: pear, flower, pear = 20

Bottom row: tree, pear, tree = 29

Last column: pear, flower, tree = 27

| | | | |
|---|---|---|----|
|  |  |  | 22 |
|  |  |  | 32 |
|  |  |  | 29 |
| 36 | 20 | 27 | |

